

机密 启用前

四川省2022年普通高等学校高职教育单独招生

文化考试(普高类)

注意事项:

- 文化考试时间150分钟,满分300分(语文、数学、英语各100分)。
- 文化考试包括语文、数学、英语三个部分,每部分分为第 卷和第 卷.第I卷为选择题,第 卷为非选择题。
- 选择题部分,考生必须使用2B铅笔,在答题卡上填涂,答在试卷、草稿纸上无效。
- 非选择题部分,考生必须使用蓝色或黑色字迹的钢笔或签字笔,在指定位置作答,答在指定位置以外的地方无效。

语文

第I卷 (共20分)

一、基础知识及其运用: 本大题共3小题,每小题5分,共15分.在每小题列出的四个备选项中,只有一个是符合题目要求的,请将其选出.错选、多选或未选均无分。

1.下列词语字形书写和加点字注音完全正确的一组是

- |              |    |          |      |
|--------------|----|----------|------|
| A. 编撰(zhuan) | 娉婷 | 船舷(xuan) | 高屋建瓴 |
| B. 毛坯(pi)    | 秸秆 | 策言(zhen) | 中流砥柱 |
| C. 对峙(shi)   | 寥廓 | 濒临(bin)  | 罄竹难书 |
| D. 脐橙(qi)    | 肄业 | 采撷(xie)  | 峥嵘岁月 |

2.下列句子中加点的成语使用恰当的一项是

密封线内答题无效  
“藤梯”到走“铁梯”,如今上“楼梯”,凉山彝族自治州昭觉古里镇“悬崖村”

群众的生活水平如火如荼,日子越过越好。

B.自从《白鹿原》《平凡的世界》《人世间》等电视剧得到观众的广泛好评,文学名著再次成了炙手可热的电视剧改编材料来源。

C. 北京冬奥会举行时,恰逢中国虎年春节,春节元素与冬奥标识交相辉映,向世界展示中国文化,诉说中国与世界的"美美与共"。

D.截至2022年3月20日,美国新冠肺炎确诊病例超过7972万,死亡病例超过97万,两项数据均居世界之首,让人叹为观止。

3.下列句子没有语病的一项是

- A.孩子们通过参加多种体育活动,对公平竞争的规则有了切身感受,也有利于培养他们的社交能力,从而增强班集体的凝聚力。
- B.花果山基地每年无公害蔬菜水果的生产,除供应本市及周边市场外,还销往陕西、甘肃、青海等省,受到各地老百姓的欢迎。
- C.侧耳细听,从远处青翠的茶山上,传来一声声布谷和鸪鸪的啼唤;山坡下的楠竹林里,回应着云雀、斑鸠和许多种鸟儿的呢喃。
- D.成都大运会在举办期间,将于场馆周边、赛事沿线等区域设立一批服务小站,为社会各界参与大运会志愿服务提供便捷载体。

二、文言文阅读: 本大题共1小题,5分.在列出的四个备选项中,只有一个是符合题目要求的,请将其选出.错选、多选或未选均无分。

阅读下面的文言文选段,完成第4小题。

武益愈,单于使使晓武,会论虞常,欲因此时降武.剑斩虞常已,律曰:“汉使张胜谋杀

单于近臣,当死.单于募降者赦罪.”举剑欲击之,胜请降.律谓武曰:“副有罪,当相坐。”

武曰:“本无谋,又非亲属,何谓相坐?”复举剑拟之,武不动.律曰:“苏君,律前负汉归匈奴,幸蒙大恩,赐号称王.拥众数万,马畜弥山,富贵如此!苏君今日降,明日复然.空以身

膏草野,谁复知之!”武不应.律曰:“君因我降,与君为兄弟;今不听吾计,后虽欲复见我,尚可得乎?”武骂律曰:“汝为人臣子,不顾恩义,畔主背亲,为降虏于蛮夷,何以汝为见?

且单于信汝,使决人死生,不平心持正,反欲斗两主,观祸败.若知我不降明,欲令两国相攻,匈奴之祸,从我始矣.”(节选自《汉书·李广苏建传》)

4.对下列句子中加点词的解释,不正确的一项是

- |           |               |
|-----------|---------------|
| A. 会论虞常   | 论: 判罪。        |
| B. 欲因此时降武 | 因: 接着。        |
| C. 空以身膏草野 | 膏: 使……肥沃,做肥料。 |
| D.畔主背亲    | 畔: 同“叛”。      |



第Ⅱ卷 (共 80 分)

题 号	三	四	五	总 分	
题 分	10	30	40	总分人	
得 分				核分人	

得分	评卷人	复查人
----	-----	-----

三、翻译与默写：本大题共 2 小题，第 5 小题 6 分，第 6 小题 4 分，共 10 分。

5. 请把第 I 卷文言文选段中的画线句子翻译成现代汉语。

且单于信汝，使决人死生，不平心持正，反欲斗两主，观祸败。若知我不降明，欲令两国相攻，匈奴之祸，从我始矣。

6. 补写出下列名篇名句中的空缺部分。

(1) 定乎内外之分，*Chengdu single*，斯已矣。(庄子《逍遥游》)

(2) \_\_\_\_\_, 以手抚膺坐长叹。(李白《蜀道难》)

得分	评卷人	复查人
----	-----	-----

四、现代文阅读：本大题共 3 小题，每小题 10 分，共 30 分。

阅读下面的文字，完成第 7—9 题。

# 大地的皮肤

乔忠延

苔藓在我记忆里一直是卑微的，卑微到将之列入小草的范畴，都觉得是高看了它。我在乡村度过了童年，那时院子和道路都没硬化，到处裸露着黄土。天阴下雨时，妈妈总会告诫我，不能踩发绿的地皮，那是青苔，溜滑。那时，我是讨厌青苔的。

炎夏日当午，火烈的太阳简直能把大地炙烤成焦土，地面上哪能搜寻到苔藓的影子！然而即使在酷伏的天气，在未被水泥硬化的农家小院，只要下半天雨，干裂的地皮可能就淡绿一片了：苔藓复活了。若是连着下个两三天，就连墙头上也绿茸茸的。好个卑微的苔藓，这是何等蓬勃的生命力！

不久前去了一趟井冈山。一个星期里，雨水伴随我们登山岭，涉溪流。就在与阴雨的缠绵中，我又一次领悟了苔藓的不凡。无论雨大雨水小，沟壑里的溪流都是清凌凌的，不见丝毫浑浊。

我的家乡则不然，只要一下雨，河流肯定是浑浊的。我们村边有条汾河，从我记事起乡亲们就

高职单招文化考试(普高类)·语文 第3页共7页

把它叫作洪河。洪河的水发红发黄，很少清清亮亮。汾河就这么汨汨滔滔地流入另一条河流——黄河。黄河早先并不黄，前人称之为大河。秦汉之后，农田耕种面积扩大，森林采伐力度加大，土地裸露得越来越多，大河才沦为黄河。从前，我们村边的汾河也一定是清澈透亮的。考古发现，十万年前汾河岸边不只森林繁茂，还栖息着大象和犀牛。自然植被的损毁造成了水土的流失。

水的清或浊，除了取决于草木，我看还在于苔藓。站在井冈山上的小河边，只见雨滴汇聚为细流，从绿茵茵的苔藓上流过。苔藓紧贴地皮，流水冲刷不走一星半点泥沙。可见，苔藓的有与无，多与寡，也决定了河流的清与浊。就在那一瞬间，一个想法忽然跳了出来：苔藓是大地的皮肤。

对于皮肤，专家的定义是：披覆在人体的表层、直接与外界环境接触的组织，具有保护功能。苔藓何尝不是大地的表层，不具有保护功能？

在井冈山的这些苔藓面前，我不禁想，假若人们不曾伤害草原、森林，假若大地的皮肤完好无损，大河哪至于沦为黄河？所幸，如今炎黄子孙觉醒了，草木已经进入保护者的视野。那么苔藓呢？人们是否能一视同仁，像疼爱绿茵茵的草原、茂密的森林一样，疼爱那些长期被忽略的可爱的苔藓？

(有删改)

7. 从全文看，第一段写童年的“我”讨厌青苔，运用了什么写法？有何作用？

8. 根据选文, 哪些情况会危及苔藓的生长? 请简要概括。

9. 请简要分析本文的主旨。

高职单招文化考试(普高类)·语文 第4页共7页

无	题	答	内	线	封	密
---	---	---	---	---	---	---



得 分	评卷人	复查人
-----	-----	-----

五、写作：本大题共 1 小题，40 分。






10. 阅读下面的漫画, 根据提示和要求作文。



这幅锯木头的漫画引起你怎样的回忆、联想或感悟？请写一篇记叙文或议论文。

要求：①选好角度，确定立意，明确文体，自拟题目；②不少于 500 字；③不要套作，不得抄袭；④不泄露个人信息；⑤用规范汉字书写。

[illegible][illegible]

训中心		成都单招集训中心		成都
Training center		Chengdu single enrollment training center		Chengdu
8202823235		2023成都单招集训联系:18202823235		2023成都单招
训中心		成都单招集训中心		成都
Training center		Chengdu single enrollment training center		Chengdu
8202823235		2023成都单招集训联系:18202823235		2023成都单招
训中心		成都单招集训中心		成都
Training center		Chengdu single enrollment training center		Chengdu
8202823235		2023成都单招集训联系:18202823235		2023成都单招



## 四川省 2022 年普通高等学校高职教育单独招生

## 文化考试（普高类）

注意事项：

1. 文化考试时间 150 分钟，满分 300 分（语文、数学、英语各 100 分）。
2. 文化考试包括语文、数学、英语三个部分，每部分分为第 I 卷和第 II 卷。第 I 卷为选择题，第 II 卷为非选择题。
3. 选择题部分，考生必须使用 2B 铅笔，在答题卡上填涂，答在试卷、草稿纸上无效。
4. 非选择题部分，考生必须使用蓝色或黑色字迹的钢笔或签字笔，在指定位置作答，答在指定位置以外的地方无效。

## 数学

## 第 I 卷（共 50 分）

一、单项选择题：本大题共 10 小题，每小题 5 分，共 50 分。在每小题列出的四个备选项中只有一个符合题目要求的，请将其选出。错选、多选或未选均无分。

1. 已知集合  $M = \{0, 1, 2, 3\}$ ， $N = \{x | 0 < x < 3\}$ ，则  $M \cap N =$   
A.  $\emptyset$  B.  $\{1\}$  C.  $\{1, 2\}$  D.  $\{0, 3\}$
2. 已知  $i$  为虚数单位，则  $(1+i)(i-1) =$   
A.  $-2$  B.  $-1$  C.  $1$  D.  $2$
3. 已知等差数列  $\{a_n\}$  中， $a_2 = 10$ ，公差  $d = 5$ ，则数列  $\{a_n\}$  的前 4 项和  $S_4 =$   
A. 15 B. 30 C. 50 D. 75
4. 已知向量  $a$  与向量  $b$  的夹角为  $60^\circ$ ， $|a| = 4$ ， $|b| = 5$ ，则  $a \cdot b =$   
A. 20 B. 10 C.  $5\sqrt{3}$  D.  $5\sqrt{2}$
5. 已知  $y$  轴上两点  $F_1(0, -5)$ ， $F_2(0, 5)$ ，则平面内到这两点距离之差的绝对值为 8 的动点的轨迹方程为  
A.  $\frac{x^2}{9} - \frac{y^2}{16} = 1$  B.  $\frac{y^2}{16} - \frac{x^2}{9} = 1$  C.  $\frac{x^2}{9} + \frac{y^2}{16} = 1$  D.  $\frac{x^2}{16} + \frac{y^2}{9} = 1$
6. 某学校为组建校运动会教师裁判组，将 100 名教师从 1 开始编号，依次为 1, 2,  $\dots$ , 100，从这些教师中用系统抽样方法等距抽取 10 名教师作为裁判。若 23 号教师被抽到，则下面 4 名教师中被抽到的是  
A. 1 号教师 B. 32 号教师 C. 56 号教师 D. 73 号教师

7.  $\triangle ABC$  的内角  $A, B, C$  的对边分别为  $a, b, c$ 。已知  $a = \sqrt{3}b$ ， $B + C = \frac{\pi}{3}$ ，则  $C =$

- A.  $\frac{\pi}{12}$  B.  $\frac{\pi}{8}$  C.  $\frac{\pi}{6}$  D.  $\frac{\pi}{4}$

8. 设  $\alpha, \beta$  是两个不同的平面， $m, n$  是两条不同的直线。给出下列四个命题：

- ①若  $m \parallel \alpha$ ， $n \parallel \alpha$ ，则  $m \parallel n$ ；
- ②若  $m \parallel \alpha$ ， $m \parallel \beta$ ，则  $\alpha \parallel \beta$ ；
- ③若  $\alpha \parallel \beta$ ， $m \perp \alpha$ ， $n \perp \beta$ ，则  $m \parallel n$ ；
- ④若  $m \parallel n$ ， $m \perp \alpha$ ， $n \perp \beta$ ，则  $\alpha \parallel \beta$ 。

其中正确的命题是

- A. ①② B. ②③ C. ①④ D. ③④

9. 设  $a = \log_2 3$ ， $b = \log_{0.5} 0.2$ ， $c = 0.5^{0.2}$ ，则  $a, b, c$  的大小关系为

- A.  $b > c > a$  B.  $b > a > c$  C.  $a > c > b$  D.  $a > b > c$

10. 为了得到函数  $y = \sin\left(2x + \frac{\pi}{4}\right)$  的图象，只需把函数  $y = \sin\left(2x - \frac{\pi}{4}\right)$  的图象上所有的点

- A. 向左平移  $\frac{\pi}{4}$  个单位  
B. 向右平移  $\frac{\pi}{4}$  个单位  
C. 向左平移  $\frac{\pi}{2}$  个单位  
D. 向右平移  $\frac{\pi}{2}$  个单位

## 第 II 卷（共 50 分）

总 分	题 号	第 II 卷	
		二	三
核分人	题 分	12	38
复查人	得 分		

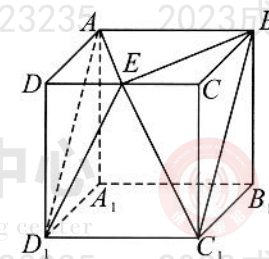
得 分	评卷人	复查人

二、填空题：本大题共 3 小题，每小题 4 分，共 12 分。  
请在每小题的空格中填上正确答案。错填、不填均无分。

11. 定义在  $\mathbf{R}$  上的函数  $f(x)$  满足  $f(x-1) = f(x+1)$ ，若  $f(0) = 1$ ，则  $f(2022) =$ \_\_\_\_\_。

12. 为迎接成都大运会的召开，某高校将志愿者分为 3 个小组进行培训。若每位志愿者被分到各个小组的可能性相同，则甲、乙两位志愿者被分到同一个小组的概率为\_\_\_\_\_。

13. 如图所示，在正方体  $ABCD - A_1B_1C_1D_1$  中， $AB = 1$ ， $E$  为  $CD$  的中点，则四棱锥  $E - ABC_1D_1$  的体积为\_\_\_\_\_。



得分	评卷人	复查人

三、解答题：本大题共 3 小题，第 14 小题 12 分，第 15、16 小题各 13 分，共 38 分。解答应写出文字说明、证明过程或演算步骤。

14. 设  $\{a_n\}$  是等比数列，已知  $a_1 + a_3 = 10$ ， $a_2 + a_4 = 30$ 。

(I) 求  $\{a_n\}$  的通项公式；

(II) 求  $\{a_n\}$  的前  $n$  项和  $S_n$ 。

16. 已知点  $F\left(\frac{p}{2}, 0\right)$  到直线  $l_1: 3x + 4y - 11 = 0$  的距离等于  $\frac{8}{5}$ ，其中  $0 < p < 10$ 。设平面内与点  $F$  和直线  $l_2: x = -\frac{p}{2}$  距离相等的点的轨迹为  $C$ 。

(I) 求  $C$  的方程；

(II) 设  $l_1$  与  $C$  在第一象限的交点为  $A$ ， $l_2$  与  $x$  轴的交点为  $B$ ，求  $\triangle ABF$  的面积。

15. 已知  $a, b$  为实数， $f(x) = ax^2 + 5x - 2\sin x + b$  是定义在  $\mathbf{R}$  上的奇函数。

(I) 求  $a, b$  的值；

(II) 证明：函数  $f(x)$  有唯一零点。

密封线内答题无效



成都单招集训中心  
hengdu single enrollment training center  
成都单招集训联系: 18202823235  
2023成都单招集训联系: 18202823235

考生号: 2251  
准考证号:  
姓名:

效  
无  
题  
内  
线  
封  
密

机密 ★ 启用前

四川省 2022 年普通高等学校高职教育单独招生  
文化考试(普高类)

- 注意事项:
1. 文化考试时间 150 分钟, 满分 300 分(语文、数学、英语各 100 分)。
  2. 文化考试包括语文、数学、英语三个部分, 每部分分为第 I 卷和第 II 卷。第 I 卷为选择题, 第 II 卷为非选择题。
  3. 选择题部分, 考生必须使用 2B 铅笔, 在答题卡上填涂; 答在试卷、草稿纸上无效。
  4. 非选择题部分, 考生必须使用蓝色或黑色字迹的钢笔或签字笔, 在指定位置作答; 答在指定位置以外的地方无效。

英语

第 I 卷 (共 70 分)

- 一、单项填空: 本大题共 10 小题, 每小题 2 分, 共 20 分。从 A、B、C、D 四个备选项中, 选出最佳选项。错选、多选或未选均无分。
1. — When are you leaving?  
— \_\_\_\_\_.  
A. I will see you off today      B. I live very far from here  
C. I'm leaving home            D. I'm flying on Friday
  2. I have lost my \_\_\_\_\_. I don't want to eat anything.  
A. diet                              B. appetite                      C. happiness                      D. way
  3. Thanks a lot! I'm very \_\_\_\_\_ for your help.  
A. grateful                          B. eager                              C. crazy                              D. sorry
  4. I've explained several times but he \_\_\_\_\_ doesn't understand.  
A. yet                                  B. already                          C. also                                  D. still
  5. When did you \_\_\_\_\_ smoking?  
A. cut off                              B. give up                              C. make up                              D. throw away
  6. \_\_\_\_\_ entering the hall, he found everyone waiting for him.  
A. At                                      B. By                                      C. On                                      D. In
  7. Take your overcoat with you \_\_\_\_\_ it gets cold.  
A. in case                              B. so that                              C. unless                              D. although
  8. I made him \_\_\_\_\_ what I had told him.  
A. repeating                          B. repeated                          C. repeat                              D. to repeat
  9. Our geography teacher told us that the moon \_\_\_\_\_ around the earth.  
A. went                                  B. was going                          C. is going                              D. goes
  10. He arrived late again, \_\_\_\_\_ disappointed his boss.  
A. what                                  B. that                                  C. which                                  D. who

二、语言应用: 本大题共 10 小题, 每小题 2 分, 共 20 分。从 A、B、C 三个备选项中, 选出最佳选项。错选、多选或未选均无分。

Part A

11. From the given information, we know \_\_\_\_\_.



- A. it's closed on Sunday  
B. it opens three days a week  
C. it doesn't open on Friday morning  
12. This is probably a/an \_\_\_\_\_.



- A. note                                  B. invitation                                  C. letter



13. What do you know from the ad?

MODERN  
**HOME  
FOR SALE**

PRICE START AT  
**\$5,000.000**

- 5 Bedrooms
- 2 Living Rooms
- Open Kitchen
- Swimming Pool
- Natural View

**BOOK NOW**

WWW.REALLYGREATSITE.COM

- A. We can get the house now.  
B. There are 7 rooms in the house.  
C. The house costs \$ 5,000.000 at most.

14. When is the flight likely to take off?

cebu pacific

Flight **5J363** 13AUG19  
LI/BOLANG

**MFM** > **MNL**  
MACAU MANILA

Gate **11A** Seat **15F**

Please be at the gate before: **2130H**

Seq 129

cebuspacifair.com

- A. At 21:30. B. After 21:30. C. Before 21:30.

15. Which is true according to the instructions on the machine?

**NO CHANGE GIVEN**

Payment Options:

- COIN** - (10c, 20c, 50c, \$1, \$2)  
Insert Coins, press OK for ticket
- Credit Card** - Press **TIME SELECT**  
button and follow screen prompts

**DISPLAY TICKET ON DASHBOARD**

**OK**

- A. Cash is not acceptable.  
B. Change is not necessary.  
C. A \$ 5 coin doesn't work.

16. What does the picture say?

**MISSING DOG**  
A CRY FOR HELP FOR OUR FURRY FRIEND.

**GUILLERMO**  
Breed: Labrador  
Color: Golden brown  
Collar: Yellow

Guillermo has been missing since 4 January 2022 and was last seen at Grise Fiord Park.

**\$200  
REWARD**

CALL OR TEXT WITH ANY INFORMATION  
**123-456-7890**

- A. The dog gets slightly hurt.  
B. The dog owner sells it for \$ 200.  
C. The dog owner is worriedly looking for it.



17. The language used on the board is \_\_\_\_\_.



- A. humorous B. serious C. famous

Part B



18. If you want to take the 14:30 boat, you must get here \_\_\_\_\_ at the latest.  
A. by 14:00 B. by 12:30 C. by 13:45
19. How long does the boat trip take?  
A. 30 minutes. B. 45 minutes. C. 10 and a half hours.
20. How much do you have to pay if you go together with your 12-year-old twins?  
A. £28. B. £19. C. £10.

三、阅读理解：本大题共 10 小题，每小题 3 分，共 30 分。阅读下列短文，从 A、B、C、D 四个备选项中，选出最佳选项。错选、多选或未选均无分。

A

Knowing about yourself not only means finding what you are good at and what you like, but also means discovering what you are not good at and what you don't like. Both help you to see your aim in life.

Although most students would be unhappy if they found that they had failed an advanced math course, they have actually learned a great deal about themselves. They know they should not become engineers or physical scientists, and that they should not be good at accounting work. So failing can help a student to lead a much happier life as he or she draws the right conclusion from the failing. They may then decide on their aims and choose the kind of work they would like to do.

It is impossible to decide whether or not you like something until you have tried it. If you decide that you would like to play the piano, you need to take more than one lesson before you can know whether you have any interest or ability. It's not enough to want to be a pianist. You also have to like the hard and long training before you become one. If you would enjoy being a great pianist but hate the work, forget it.

It's a good plan to try as many as possible when you are still young. And then you will come to a wise decision.

21. According to the text, knowing about yourself means \_\_\_\_\_.  
A. finding what you are poor at B. discovering the things you like  
C. drawing conclusions from failures D. having a whole picture of yourself
22. Failing a course may help you \_\_\_\_\_.  
A. spend more time on it B. learn more about it  
C. know much about yourself D. find what you are good at
23. You can't decide whether you are interested in something \_\_\_\_\_.  
A. before you give it up B. before you have a try  
C. unless you take advanced courses D. unless you start accounting work
24. How are paragraph 2 and paragraph 3 mainly developed?  
A. By giving examples. B. By telling stories.  
C. By asking questions. D. By making comparisons.
25. What does the author mean by "a wise decision" in the last paragraph?  
A. Setting your goal in life. B. Living a much happier life.  
C. Trying as many as possible. D. Deciding to work harder.

B

Reducing wasted food would probably help lower harmful emissions（排放物）into the air and slow down climate change, according to experts. Over 15% of emissions from farming could be avoided if we managed our food supplies better. About 3.3 billion tons of carbon dioxide（二氧化碳）



comes from food waste.

A third of the food produced worldwide is never eaten. Some gets spoilt during day-long transport or in shops. Huge amounts of food are also thrown away by consumers, who often buy too many things which they do not eat. While the demand for food per person has stayed the same in the last twenty years, more and more food is available.

Richer countries waste more food than poorer ones. And according to farming experts, more and more food is wasted in some growing economies. Some people tend to waste food as they become richer.

It is not only important to waste less food but also to get food to the places where it is needed, where people do not have enough to eat or farming conditions are bad.

Heads of governments from around the world have recently met to discuss ways in which food waste can be reduced. Currently, we are producing 20% more food than we actually need. With this we could feed another 1.5 billion people. On the other side, over 800 million people still go hungry.

Another suggestion mentioned by food experts is to cut back on eating meat. More meat is eaten in richer countries, thus producing more greenhouse gases because producing meat is more energy-consuming.

26. What does paragraph 1 mainly tell us?

- A. We don't manage our food supplies very well.
- B. A lot of carbon dioxide comes from food waste.
- C. Reducing food waste could help slow down climate change.
- D. People should do what they can to reduce emissions into the air.

27. What can we learn from paragraph 2?

- A. Many people don't have enough food.
- B. Lots of food is wasted in today's world.
- C. Most of the food produced is never eaten.
- D. Consumers never buy more food than they need.

28. According to the text, besides wasting less food, we should \_\_\_\_.

- A. lower the price of food
  - B. improve farming conditions
  - C. discuss with the governments
  - D. send food to where it is needed
29. Food experts suggest eating less meat \_\_\_\_.
- A. to develop economy
  - B. to produce more food
  - C. to avoid becoming fat
  - D. to reduce greenhouse gases

30. In which section of a newspaper may this text appear?

- A. Nature.
- B. Science.
- C. Health.
- D. Culture.

第Ⅱ卷 （共 30 分）

题号	31	32	33	34	35	36	37	38	39	40	总分	评卷人	复查人
得分	18	2	8	2	3	2	3	5			2023	成都单招集训联系: 18202823235	2023

四、翻译：本大题共 10 小题，每小题 3 分，共 30 分。请将下面的英语句子翻译成汉语。

31. One is never too old to learn.

32. Do you have any experience in this field?

33. I'll contact you as soon as I arrive in Chengdu.

34. Sorry, the password is wrong. Try again, please.

35. Would you mind showing me your ID card, please?

36. It's said that parking in that area is a great problem.

37. I made a reservation under Mr. Huang in the coffee house.

38. I can hardly hear what he's saying, nor can the other people.

39. She has no idea what the book is about. She can't have read it very carefully.

40. Thanks to the volunteers of the Beijing 2022 Winter Olympic Games, China is better understood by foreigners.